



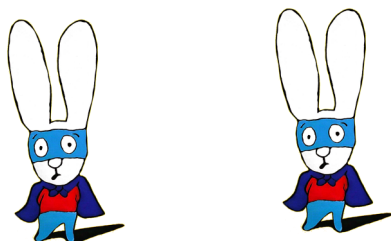


COLLE LE CHIFFRE QUI CORRESPOND À LA QUANTITÉ DE LAPINS



1	1	1	2	2	2
3	3	3	4	4	4

1	1	1	2	2	2
3	3	3	4	4	4

1	1	1	2	2	2
3	3	3	4	4	4

1	1	1	2	2	2
3	3	3	4	4	4